




Time: 10 Minutes

Paper Math 2

Total Marks: 10

3rd Month, 2nd Week, 3rd Day	Syllabus: Fraction from $\frac{1}{2}$ to $\frac{1}{10}$. Page # 95
------------------------------	---

Q.1: Complete the table. (10) نیل مکمل کریں۔

	Figure شکل	Number of parts حصوں کی تعداد	Name of fractions فرضن کا نام	Fraction فرضن
(i)		2	One half ایک ہاف	?
(ii)		?	One-third ون تھرڈ	$\frac{1}{3}$
(iii)		4	?	$\frac{1}{4}$
(iv)	?	5	One-fifth ون ففٹھ	$\frac{1}{5}$




Time: 10 Minutes

Paper Math 2

Total Marks: 10

3rd Month, 2nd Week, 3rd Day	Syllabus: Fraction from $\frac{1}{2}$ to $\frac{1}{10}$. Page # 95
------------------------------	---

Q.1: Complete the table. (10) نیل مکمل کریں۔

	Figure شکل	Number of parts حصوں کی تعداد	Name of fractions فرضن کا نام	Fraction فرضن
(i)		2	One half ایک ہاف	?
(ii)		?	One-third ون تھرڈ	$\frac{1}{3}$
(iii)		4	?	$\frac{1}{4}$
(iv)	?	5	One-fifth ون ففٹھ	$\frac{1}{5}$




Time: 10 Minutes

Paper Math 2

Total Marks: 10

3rd Month, 2nd Week, 3rd Day	Syllabus: Fraction from $\frac{1}{2}$ to $\frac{1}{10}$. Page # 95
------------------------------	---

Q.1: Complete the table. (10) نیل مکمل کریں۔

	Figure شکل	Number of parts حصوں کی تعداد	Name of fractions فرضن کا نام	Fraction فرضن
(i)		2	One half ایک ہاف	?
(ii)		?	One-third ون تھرڈ	$\frac{1}{3}$
(iii)		4	?	$\frac{1}{4}$
(iv)	?	5	One-fifth ون ففٹھ	$\frac{1}{5}$


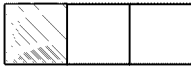

Time: 10 Minutes

Paper Math 2

Total Marks: 10

3rd Month, 2nd Week, 3rd Day	Syllabus: Fraction from $\frac{1}{2}$ to $\frac{1}{10}$. Page # 95
------------------------------	---

Q.1: Complete the table. (10) نیل مکمل کریں۔

	Figure شکل	Number of parts حصوں کی تعداد	Name of fractions فرضن کا نام	Fraction فرضن
(i)		2	One half ایک ہاف	?
(ii)		?	One-third ون تھرڈ	$\frac{1}{3}$
(iii)		4	?	$\frac{1}{4}$
(iv)	?	5	One-fifth ون ففٹھ	$\frac{1}{5}$